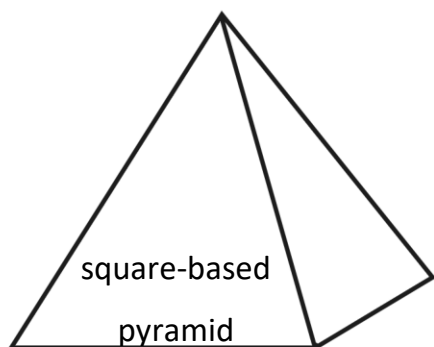


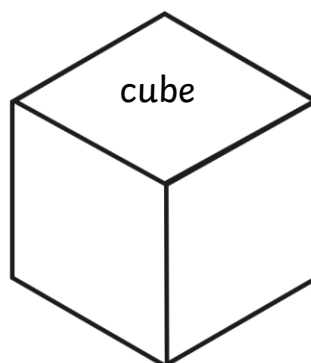
3D Shapes - Properties



edges _____

faces _____

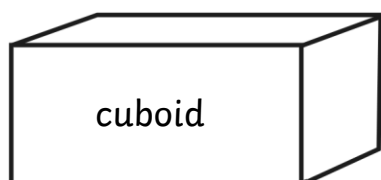
vertices _____



edges _____

faces _____

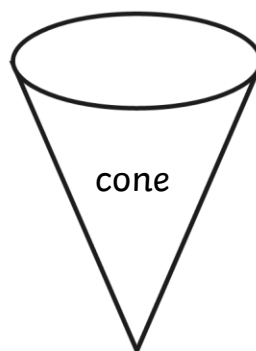
vertices _____



edges _____

faces _____

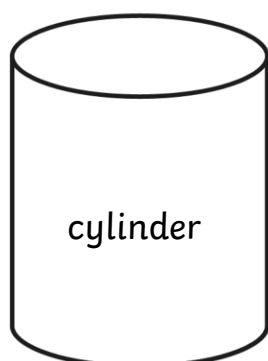
vertices _____



edges _____

faces _____

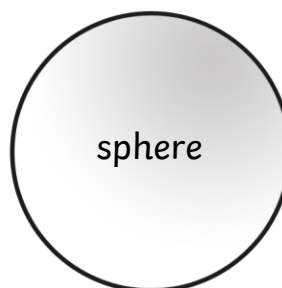
vertices _____



edges _____

faces _____

vertices _____

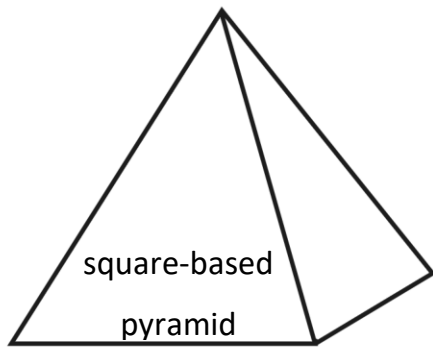


edges _____

faces _____

vertices _____

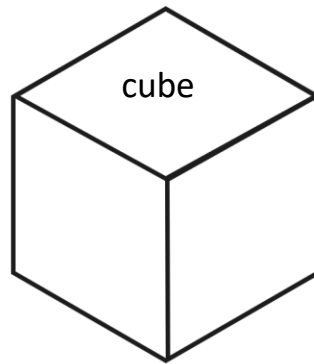
3D Shapes Properties - Answers



edges - 8

faces - 5

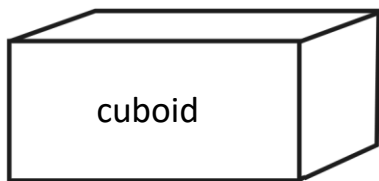
vertices - 5



edges - 12

faces - 6

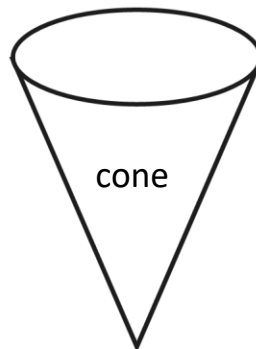
vertices - 8



edges - 12

faces - 6

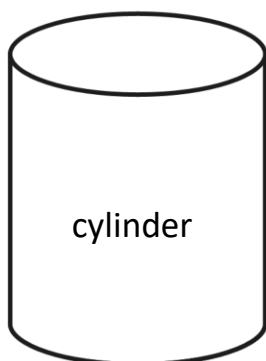
vertices - 8



edges - 1

faces - 2

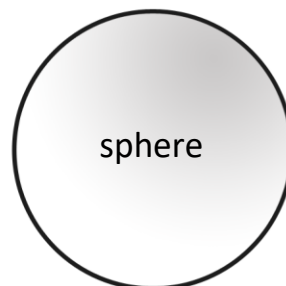
vertices - 1



edges - 2

faces - 3

vertices - 0



edges - 0

faces - 1

vertices - 0