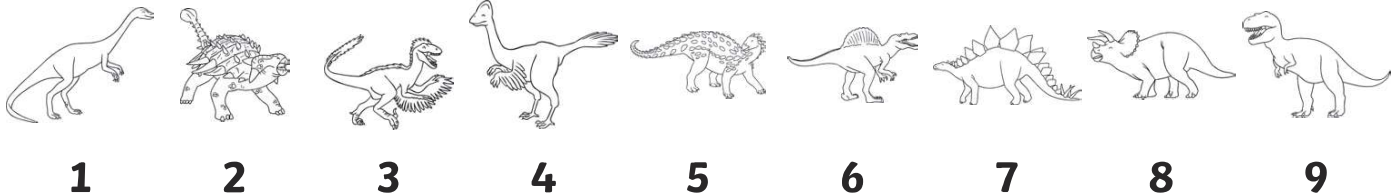


# Dinosaurs Crack the Code

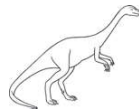
## Addition to 10

Can you crack these addition codes? Use the key at the top of the page to see the numbers for each dinosaur. Look at the dinosaurs in the questions and write the numbers in the boxes to create and solve an addition sum.


### Key



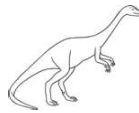
+



=



+




=



+



=



+



=



+



=