

Section 1

Double these numbers:

10 →

6 →

8 →

Section 2

Ben has 15 marbles. He loses 3. How many are left?



Section 4


Share these apples equally into 2 groups.



How many are in each group?

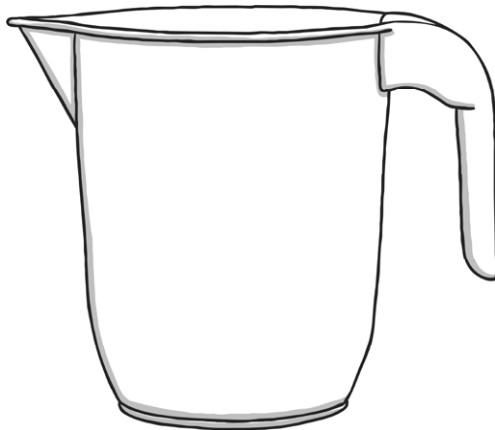
Section 6

Share the pencils into groups of 4. How many groups are there?



Section 3

Colour in the juice to show the jug is $\frac{3}{4}$ full.



Section 5

Write the answer to the sum on the calculator:



Section 7

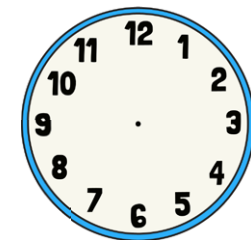

In 2 years' time, Tom will be 12 years old.



How old is he now?

Section 8

What time will it be in one hour?
Draw the hands on the clock.



Year 1 Maths Activity Mat: 5

Answers

Section 1

Double these numbers:

10 →

6 →

8 →

Section 2

Ben has 15 marbles. He loses 3. How many are left?



Section 4

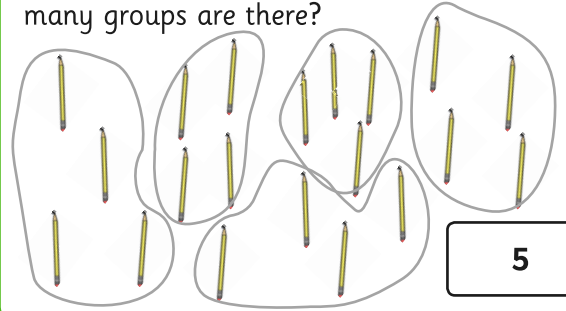
Share these apples equally into 2 groups.



How many are in each group?


Section 6

Share the pencils into groups of 4. How many groups are there?



Section 3

Colour in the juice to show the jug is $\frac{3}{4}$ full.



Section 5

Write the answer to the sum on the calculator:



Section 7

In 2 years' time, Tom will be 12 years old.



How old is he now?

Section 8

What time will it be in one hour?
Draw the hands on the clock.

